

Math 4
Exam 2
February 2, 1999

Name _____

Instructor _____

Show all work for partial credit. Be neat.

1. Find the equation of the line that is perpendicular to $2x + 3y = 12$ and has the same y -intercept.
(6)

2. Write the equation of the line that passes through the given points.

- (3) a) (3,-1) (-4,-1)

- (3) b) (2,4) (4,-4)

- (3) c) (2,-1) (2,-6)

3. Find a mathematical expression to model the following:
(8) z varies directly as the square of x and inversely as y .

If $z = 4$ when $x = -2$ and $y = 5$, what is k ?

$k =$ _____

4. Let $f(x) = 2x^2 - 1$; $g(x) = 2 - x$; $h(x) = \begin{cases} 3 - x^2, & x \geq 0 \\ 3 + 2x, & x < 0 \end{cases}$. Calculate and simplify the following. Show intermediate steps.

(5) a) $(f \circ g)(2.3)$

(5) b) $h(3) - h(-3)$

(5) c) $\frac{f(x+2) - f(x)}{2}$

(5) d) $\left(\frac{g}{h}\right)(-1)$

(5) e) $(g \circ h)(-1)$

5. Is the given function even or odd?

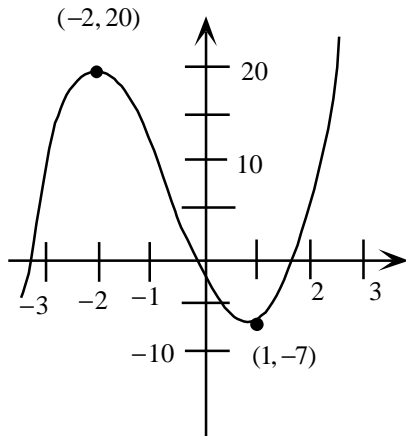
(3) a) $f(x) = -x^4 + 2x^2 - 1$

(3) b) $f(x) = 2x^3 + 3x^2$

(3) c) $f(x) = 4x^3 + 3x$

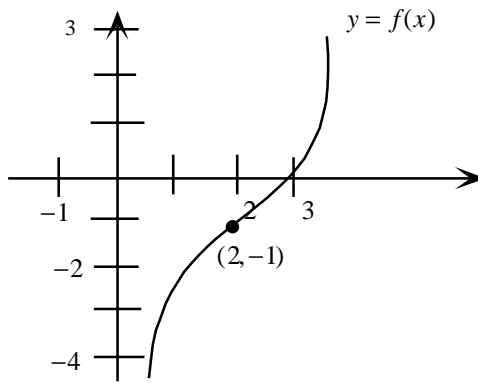
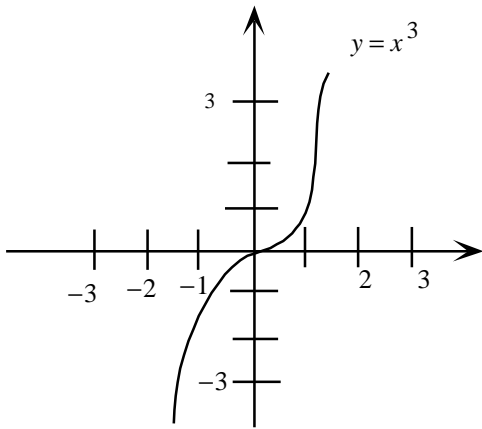
6. Over which interval(s) is the function increasing?

(4) $f(x) = 2x^3 + 3x^2 - 12x$



7. Use the graph of $y = x^3$ to write an equation for the function $y = f(x)$ as graphed.

(5)



$f(x) =$ _____

8. Given $f(x) = \sqrt{2x-1}$, state the domain of $f(x)$. Find $f^{-1}(x)$.

(7)

domain _____

$f^{-1}(x) =$ _____

9. Let $f(x) = 3-x$ and $g(x) = x^3$. Find $(g^{-1} \circ f^{-1})(-5)$.

(9)

$f^{-1}(x) =$ _____

$g^{-1}(x) =$ _____

$(g^{-1} \circ f^{-1})(-5) =$ _____

10. Given $y = -2x^2 - 4x - 5$.
(8) Write in standard form for a parabola and determine the maximum or minimum value.

equation: _____

11. Find the quadratic function that has a maximum point at $(-1,2)$ and passes through $(0,1)$.
(5)

12. Find the intercepts of $y = x^2 - 4x + 3$.
(5)

x-intercepts _____

y-intercepts _____

- Bonus:** Find a relationship between x and y so that (x, y) is equidistant from the two points $(4,-1)$ and $(-2,3)$.
(5)
